

1. $10 + 10 + 10 + 10 + 10$
 $10 + 10 + 10 + 10 + 10 = 100$

2. January, February, March

3. Number in right order.

Dinner

Breakfast

Lunch



4. $4 \times 3 = 12$

5. Write the number before ninety one.

6. Colour about one third of this glass.



7. Write the numeral one hundred.

8. Write how many tens are in 100.

9. Share \$50 between two people.

\$ each



10. How many months are there in a year? months

2008
January

Sun	Mon	Tue	Wed	Thu	Fri	Sat
	1	2	3	4	5	6
7	8	9	10	11	12	13
14	15	16	17	18	19	20
21	22	23	24	25	26	27
28	29	30	31			

11. 50, 60, , 80, 90, 100

12. Sunday, Monday,

13. Number in right order.

a. Afternoon

b. Night

c. Morning


14. $20 + 20 + 20 + 20 + 20 = 100$

15. Write the number after 99.

16. $5 \times 3 = 15$

17. $3 \times 5 = 15$

18. Colour about one-half of this glass.



19. Write the number name of 99.

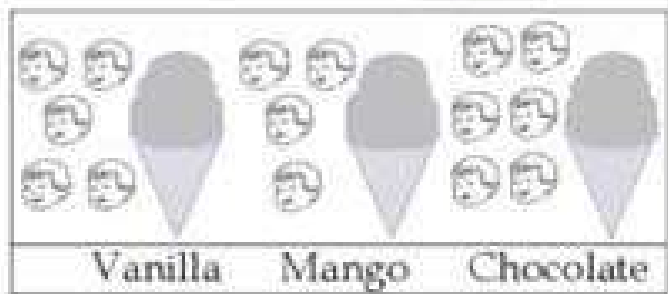
20. What are the chances that you will help your mother today?

a. Yes

b. No

c. Maybe

1. How many children like vanilla icecream?



2. How many children liked mango icecream?

3. Which flavour is the most popular?

4. How many children were asked?

5. Tick the shape with no corners.



6. Cute little girl Kate had 5 dolls. She gave 3 to her friend. How many is she left with now?

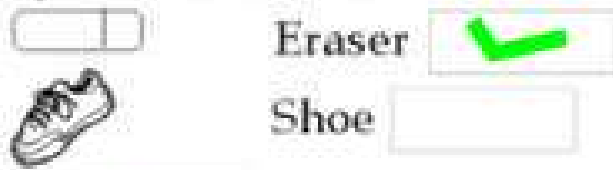
7. Which month comes after July? August September

8. What is lighter: your pencil-box or your pencil?
Pencil box Pencil
Same

9. What day was it yesterday?

10. Do you think that the sky will fall today?
Yes Of course not
Maybe

11. Which is lighter: your eraser or your shoe? Tick.




12. $4 + \text{ } 5 \text{ } = 9$

13. $12 - \text{ } 3 \text{ } = 9$

14. What number comes before 28?

15. What do you think? Does side A match side B?



16. How many groups of 2?



17. Expand the number 34.



18. Write the greater number closer to the number 18.



19. Put the symbol > or <

11 9



20. If the monster shuts his four eyes, how many remain open?