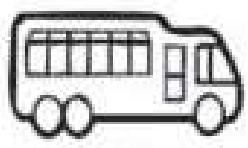







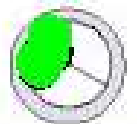



- Is 25 an odd number or an even number?
- Is \$20 enough to buy a cold drink?
 

Restaurant Menu	
Cold drink:	\$25
Hot drink:	\$15
Icecream:	\$40


 a. Yes   
 b. No
- How much change would you have from \$50 if you bought hot drink? \$
- If you want all three, how much money do you need? \$
- Which month is after July?
  - September
  - August
- Which is longer: a  or a ?
  - Bus
  - Car
- How many pairs of sunglasses are needed for these  faces?  pairs
- How many tens make up 80?
- $10 + 10 + 10 + 50 =$
- How many wheels are there in a car?

- Is 40 an odd number or an even number?
- How many children have a cat in their houses? 

Cats	Ducks	Birds
		
- Which is more common: a bird or a dog?
  - Bird
  - Dog
- How many children were asked altogether? answer in the comment box
- Which month comes after December?
- If you fold this shape  will both sides match?
  - Yes
  - No
- How many pairs of eyes do these kids have altogether? 
- How many tens make up 110?
- $10+10+10+10+10+60 =$
- Colour one third of this pizza. 

1. There are 60 passengers in  3 buses. How many passengers are there in each bus?
2. Write the place value of circled digit. 2 7 8 (2)
3. Do you buy apples in kilograms or kilometres?
4. If you ride a bike for 98 km, with 32 km yet to go, how many kilometres will you be riding in total?
5. What is double of 2500?
6.  $1\text{ l} = 1000\text{ ml}$
7. Is midnight 12 am or 12 pm?
8. What is the sum of 1100 and 500?
9. 4050, 4060,  4080
10. What is the result of  $13 \times 2$ ?

Answer in the  
comment box

11. Write in numbers, the sum of 4000 and 1000.
12. Fred Quimby, the barber, cut the hair of 15 boys on Monday and 32 boys on Tuesday. Write the total number of boys who had a haircut.
13. If the date is 14/12/07, what is the month?
14. There were 179 fish in a tank and Reed added 21 more. How many fish are in the tank now?
15. What is the time? 
16. Draw an arrow showing anticlockwise direction.
17. Which is longest?  
 20mm  2cm  2m
18. Count the number of teachers in your school. Is the number  
Odd  Even
19. If you are standing up, will you be vertical or horizontal?
20. A pentagon has  sides.